








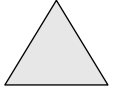
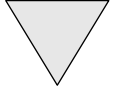
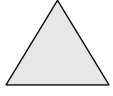
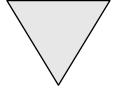
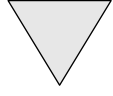
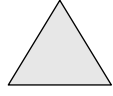
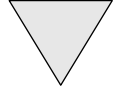
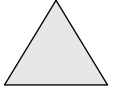
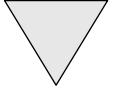
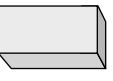
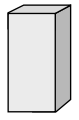
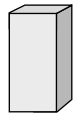

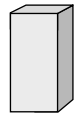
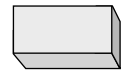
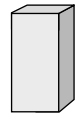
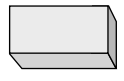
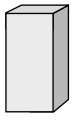


















 아래와 같이 반복되는 규칙을 찾아 □안에 들어갈 알맞은 모양에 ○를 해 보세요.

 -  -  -  -  -  -  - □	 
--	---

 -  -  -  - □ -  -  - 	 
--	---

 -  - □ -  -  -  -  - 	 
---	---

 - □ -  -  -  -  -  - 	 
---	---

□ -  -  -  -  -  -  - 	 
--	---

[패턴] ①

수학

B

아래와 같이 반복되는 규칙을 찾아 □안에 들어갈 알맞은 모양에 ○를 해 보세요.

--	--

--	--

--	--

--	--

--	--

아래와 같이 반복되는 규칙을 찾아 빈 곳에 들어갈 개수만큼 ○를 그려 보세요.

--	--

--	--


--	--

--	--

[패턴] ③

수학

B

 반복되는 규칙을 찾아 □안에 들어갈 수를 써 보세요.

1 - 2 - 1 - 2 - 1 - □ - 1 - 2 - 1 - 2

7 - □ - 7 - 5 - 7 - 5 - 7 - 5 - 7 - 5

10 - 20 - 10 - □ - 10 - 20 - 10 - 20 - 10 - 20

□ - 5 - 15 - 15 - 5 - 5 - 15 - 15 - 5 - 5

13 - 13 - 9 - 9 - 13 - □ - 9 - 9 - 13 - 13

반복되는 규칙을 찾아 빈 곳에 들어갈 동물을 선으로 이어 보세요.

